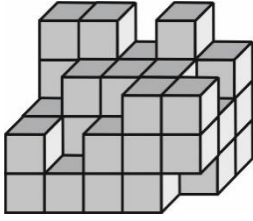
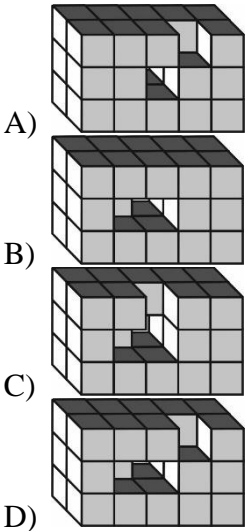
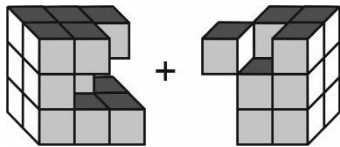


1. Ushbu shakl nechta yaxlit kublardan tashkil topgan?

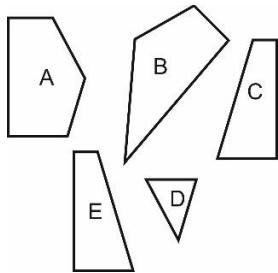


- A) 42 B) 41 C) 38 D) 40

2.



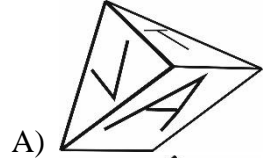
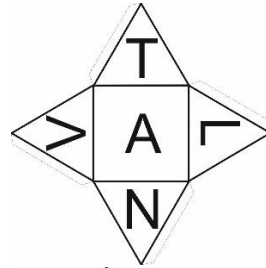


3. Quyida keltirilgan qaysi shakllarni birlashtirilishidan kvadrat hosil bo'radi?

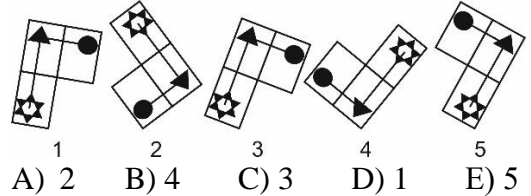


- A) BDE  
B) ACD  
C) ABC  
D) CDE

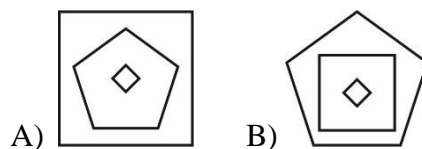
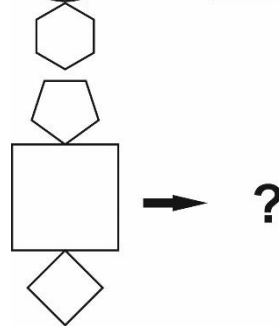
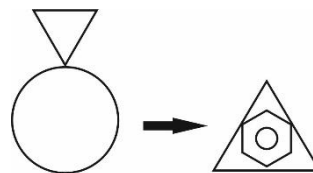
4. Quyida keltirilgan bir xil shakllardan qay biri yoyilmaga to'g'ri keladi?

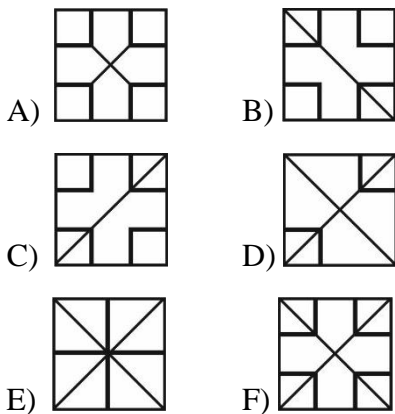
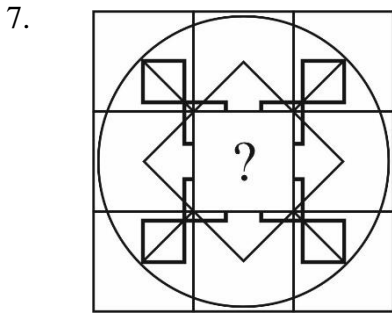
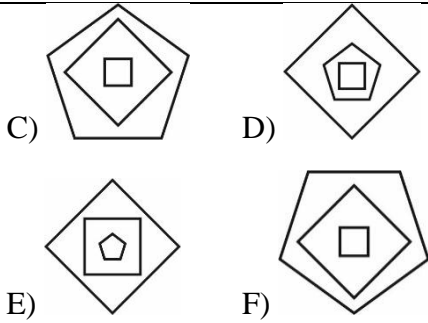


5. Quyidagilardan qay biri ortiqcha?

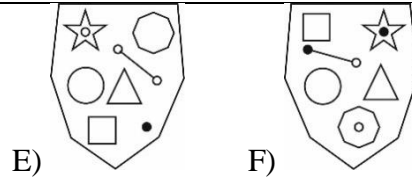
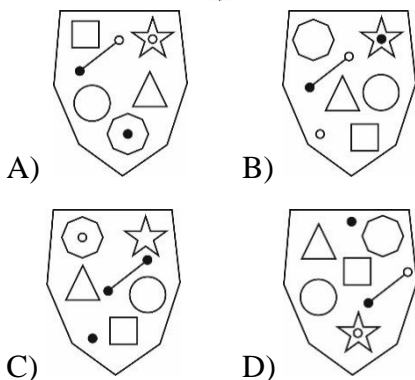
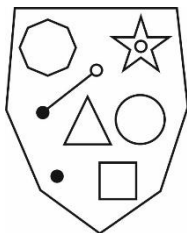


6.

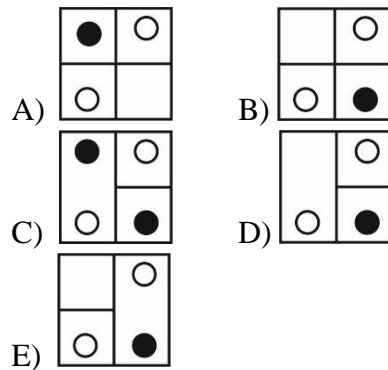
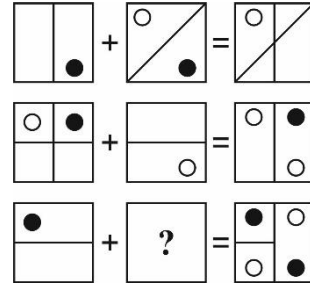




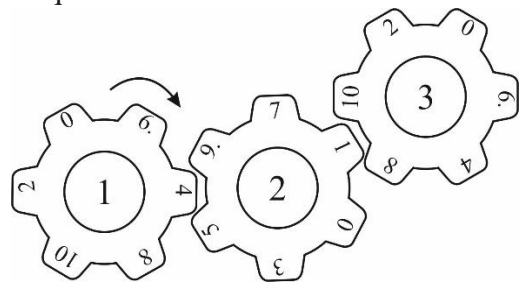
8. Quyidagi keltirilgan holatga qaysi javob mos keladi?



9. So'roq o'rniga mos kvadratni toping.



10. Tishli g'ildiraklar tishlari yordamida birikkan bo'lsa, birinchi g'ildirakdagi 10 raqam ikkinchi g'ildirakdagi qaysi raqamlar bilan, ikkinchi g'ildirakdagi 9 raqam uchinchi g'ildirakdagi qaysi raqamlar bilan to'qnashadi?



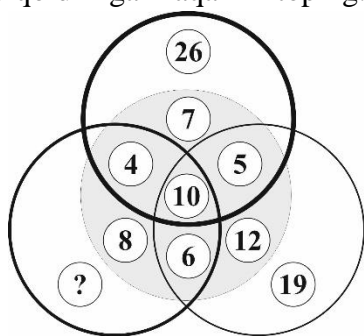
- A) 10 – 0, 3; 9 – 0, 2
- B) 10 – 3, 5; 9 – 4, 6
- C) 10 – 0, 3; 9 – 8, 4
- D) 10 – 1, 0; 9 – 6, 0

11. Quyida keltirilgan qonuniyat asosida raqamlarni toping.

2, 5, 15, 18, ?, ?, 171, 174

- A) 28, 31
- B) 58, 61
- C) 54, 57
- D) 165, 168

12. Tushirib qoldirilgan raqamni toping.



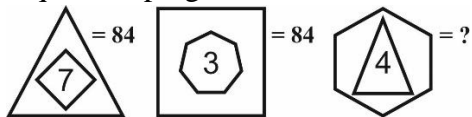
- A) 27    B) 24    C) 17    D) 22

13. Quyida keltirilgan qonuniyat asosida raqamni toping.

- 96 (16) 12;  
78 (12) 13;  
88 (... ) 11

- A) 33    B) 8    C) 77    D) 16

14. Quyida keltirilgan qonuniyat asosida raqamni toping.



- A) 84    B) 72    C) 88    D) 68

15. Bir-biriga zid ma'noli bo'lmagan so'zlarni toping.

- A) Shodlik-g'am  
B) Yosh-qari  
C) Kar-soqov  
D) Mehr-qahr

16. Birinchi so'zni to'ldiruvchi va oxirgi so'zni boshlovchi qavs ichidagi so'zni toping.

Ushbu so'zda qaysi harf bor?

**AZA (... ) BOZ.**

- A) O    B) A    C) N    D) L

17. Agar **AZIYAT** 619368 ga teng bo'lsa, **TAZIYA** nechiga teng?

- A) 869136    B) 861396  
C) 619369    D) 861936

18. Quyidagi anagrammada keltirilgan so'zlarning qaysi biri ortiqcha?

- A) ANRUT    B) VQUOT  
C) ARAG'Q    D) LLAAYK

19. Harflar va sonlar o'rtasidagi bo'g'liqlikni toping. So'roq belgisini qaysi son bilan almashtirish kerak?

U	18	B
D	10	N
P	8	H
L	?	G
Y	3	G'

- A) 4    B) 7    C) 16    D) 5

20. «**ADOLATPARVAR**» so'ziga bog'liq bo'lmagan so'zni toping.

- A) Odil    B) Padar  
C) Davr    D) Parda